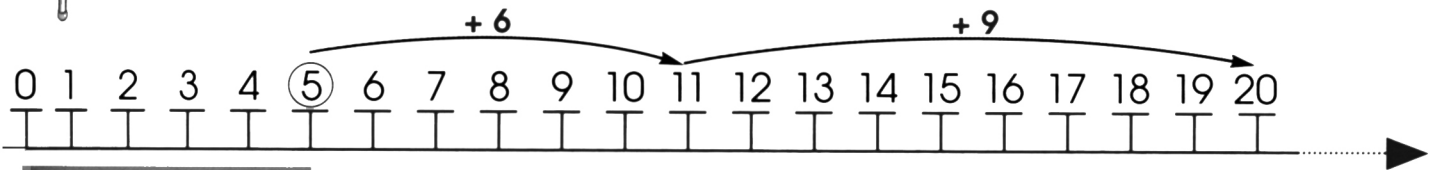


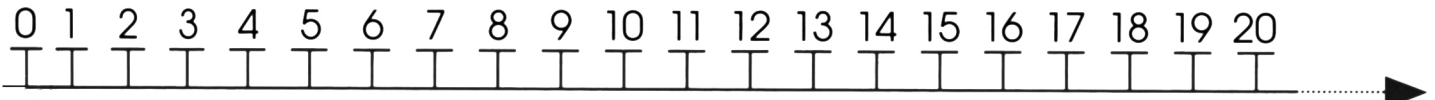


# Addizioni e sottrazioni

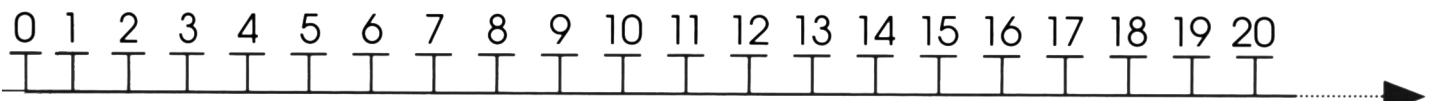
• ESEGUI LE ADDIZIONI E LE SOTTRAZIONI UTILIZZANDO LA LINEA DEI NUMERI.



$$5 + 6 + 9 = \underline{\quad}$$

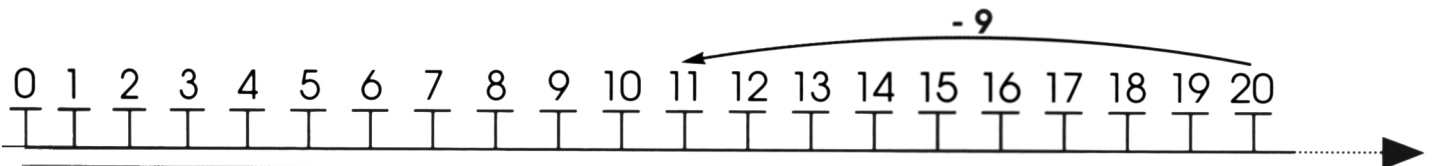


$$8 + 5 + 7 = \underline{\quad}$$

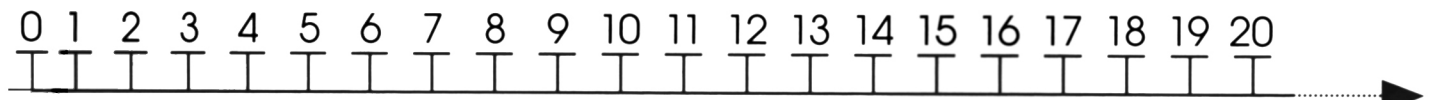


$$8 + 2 + 10 = \underline{\quad}$$

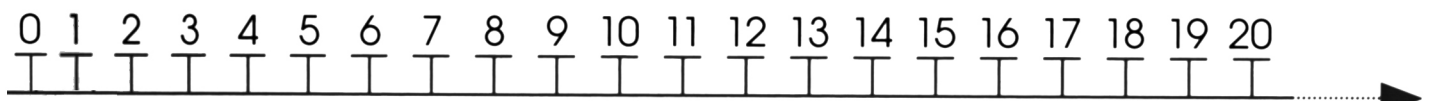
• ESEGUI LE SOTTRAZIONI UTILIZZANDO LA LINEA DEI NUMERI.



$$10 - 9 = \underline{\quad}$$



$$8 - 7 = \underline{\quad}$$



$$18 - 11 = \underline{\quad}$$